


General Chemistry  
Mr. MacGillivray  
Quiz #14:  
Lewis Dot Structures

Draw Lewis dot structures for the following molecules.


H<sub>2</sub>



H<sub>2</sub>O



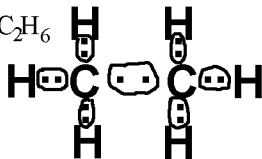
CO<sub>2</sub>



NH<sub>3</sub>



C<sub>2</sub>H<sub>6</sub>



C<sub>2</sub>H<sub>2</sub>



N<sub>2</sub>



CO<sub>3</sub><sup>2-</sup>

